

SAMPLE PROBLEM 11.4

A ball is thrown vertically upward from the 12-m level in an elevator shaft with an initial velocity of 18 m/s. At the same instant an open-platform elevator passes the 5-m level, moving upward with a constant velocity of 2 m/s. Determine (a) when and where the ball will hit the elevator, (b) the relative velocity of the ball with respect to the elevator when the ball hits the elevator.

SOLUTION

Motion of Ball. Since the ball has a constant acceleration, its motion is *uniformly accelerated*. Placing the origin O of the y axis at ground level and choosing its positive direction upward, we find that the initial position is $y_0 = +12$ m, the initial velocity is $v_0 = +18$ m/s, and the acceleration is $a = -9.81$ m/s². Substituting these values in the equations for uniformly accelerated motion, we write

$$v_B = v_0 + at \quad v_B = 18 - 9.81t \quad (1)$$

$$y_B = y_0 + v_0t + \frac{1}{2}at^2 \quad y_B = 12 + 18t - 4.905t^2 \quad (2)$$

Motion of Elevator. Since the elevator has a constant velocity, its motion is *uniform*. Again placing the origin O at the ground level and choosing the positive direction upward, we note that $y_0 = +5$ m and write

$$v_E = +2 \text{ m/s} \quad (3)$$

$$y_E = y_0 + v_E t \quad y_E = 5 + 2t \quad (4)$$

Ball Hits Elevator. We first note that the same time t and the same origin O were used in writing the equations of motion of both the ball and the elevator. We see from the figure that when the ball hits the elevator,

$$y_E = y_B \quad (5)$$

Substituting for y_E and y_B from (2) and (4) into (5), we have

$$5 + 2t = 12 + 18t - 4.905t^2$$

$$t = -0.39 \text{ s} \quad \text{and} \quad t = 3.65 \text{ s} \quad \blacktriangleleft$$

Only the root $t = 3.65$ s corresponds to a time after the motion has begun. Substituting this value into (4), we have

$$y_E = 5 + 2(3.65) = 12.30 \text{ m}$$

$$\text{Elevation from ground} = 12.30 \text{ m} \quad \blacktriangleleft$$

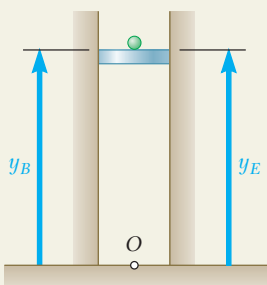
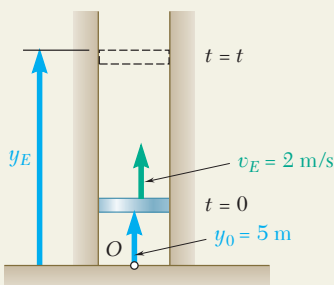
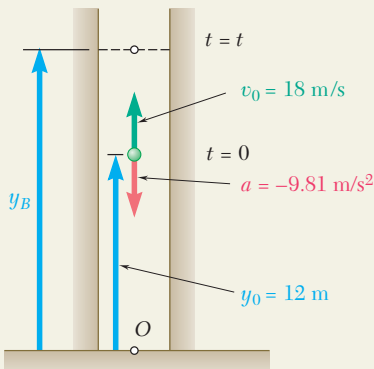
The relative velocity of the ball with respect to the elevator is

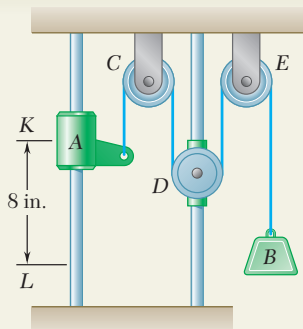
$$v_{B/E} = v_B - v_E = (18 - 9.81t) - 2 = 16 - 9.81t$$

When the ball hits the elevator at time $t = 3.65$ s, we have

$$v_{B/E} = 16 - 9.81(3.65) \quad v_{B/E} = -19.81 \text{ m/s} \quad \blacktriangleleft$$

The negative sign means that the ball is observed from the elevator to be moving in the negative sense (downward).





SAMPLE PROBLEM 11.5

Collar A and block B are connected by a cable passing over three pulleys C, D, and E as shown. Pulleys C and E are fixed, while D is attached to a collar which is pulled downward with a constant velocity of 3 in./s. At $t = 0$, collar A starts moving downward from position K with a constant acceleration and no initial velocity. Knowing that the velocity of collar A is 12 in./s as it passes through point L, determine the change in elevation, the velocity, and the acceleration of block B when collar A passes through L.

SOLUTION

Motion of Collar A. We place the origin O at the upper horizontal surface and choose the positive direction downward. We observe that when $t = 0$, collar A is at the position K and $(v_A)_0 = 0$. Since $v_A = 12$ in./s and $x_A - (x_A)_0 = 8$ in. when the collar passes through L, we write

$$v_A^2 = (v_A)_0^2 + 2a_A[x_A - (x_A)_0] \quad (12)^2 = 0 + 2a_A(8)$$

$$a_A = 9 \text{ in./s}^2$$

The time at which collar A reaches point L is obtained by writing

$$v_A = (v_A)_0 + a_A t \quad 12 = 0 + 9t \quad t = 1.333 \text{ s}$$

Motion of Pulley D. Recalling that the positive direction is downward, we write

$$a_D = 0 \quad v_D = 3 \text{ in./s} \quad x_D = (x_D)_0 + v_D t = (x_D)_0 + 3t$$

When collar A reaches L, at $t = 1.333$ s, we have

$$x_D = (x_D)_0 + 3(1.333) = (x_D)_0 + 4$$

Thus,

$$x_D - (x_D)_0 = 4 \text{ in.}$$

Motion of Block B. We note that the total length of cable ACDEB differs from the quantity $(x_A + 2x_D + x_B)$ only by a constant. Since the cable length is constant during the motion, this quantity must also remain constant. Thus, considering the times $t = 0$ and $t = 1.333$ s, we write

$$x_A + 2x_D + x_B = (x_A)_0 + 2(x_D)_0 + (x_B)_0 \quad (1)$$

$$[x_A - (x_A)_0] + 2[x_D - (x_D)_0] + [x_B - (x_B)_0] = 0 \quad (2)$$

But we know that $x_A - (x_A)_0 = 8$ in. and $x_D - (x_D)_0 = 4$ in.; substituting these values in (2), we find

$$8 + 2(4) + [x_B - (x_B)_0] = 0 \quad x_B - (x_B)_0 = -16 \text{ in.}$$

Thus:

$$\text{Change in elevation of B} = 16 \text{ in. } \uparrow \quad \blacktriangleleft$$

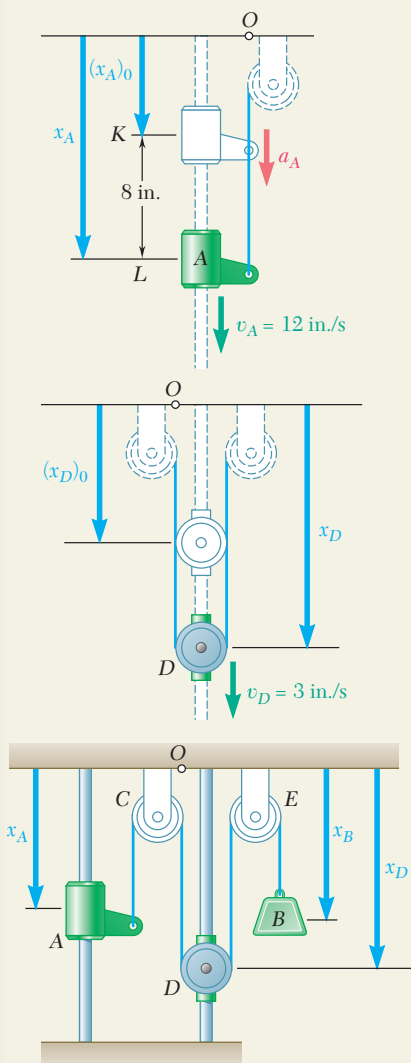
Differentiating (1) twice, we obtain equations relating the velocities and the accelerations of A, B, and D. Substituting for the velocities and accelerations of A and D at $t = 1.333$ s, we have

$$v_A + 2v_D + v_B = 0: \quad 12 + 2(3) + v_B = 0$$

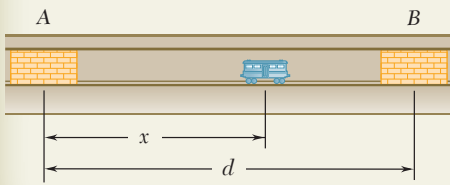
$$v_B = -18 \text{ in./s} \quad v_B = 18 \text{ in./s } \uparrow \quad \blacktriangleleft$$

$$a_A + 2a_D + a_B = 0: \quad 9 + 2(0) + a_B = 0$$

$$a_B = -9 \text{ in./s}^2 \quad a_B = 9 \text{ in./s}^2 \uparrow \quad \blacktriangleleft$$

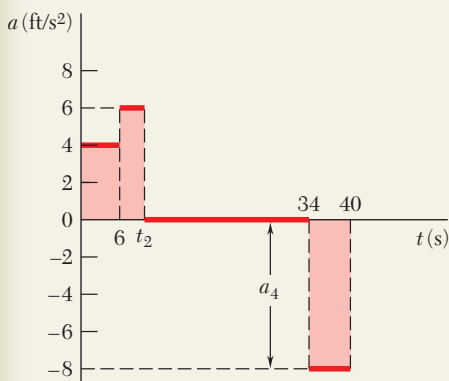


SAMPLE PROBLEM 11.6



A subway car leaves station A; it gains speed at the rate of 4 ft/s^2 for 6 s and then at the rate of 6 ft/s^2 until it has reached the speed of 48 ft/s. The car maintains the same speed until it approaches station B; brakes are then applied, giving the car a constant deceleration and bringing it to a stop in 6 s. The total running time from A to B is 40 s. Draw the a - t , v - t , and x - t curves, and determine the distance between stations A and B.

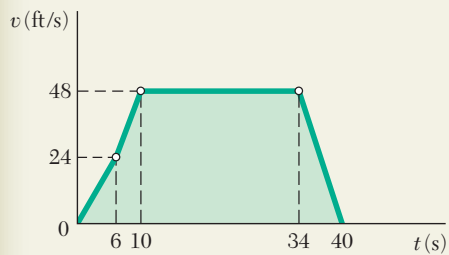
SOLUTION



Acceleration-Time Curve. Since the acceleration is either constant or zero, the a - t curve is made of horizontal straight-line segments. The values of t_2 and a_4 are determined as follows:

- $0 < t < 6$: Change in $v = \text{area under } a\text{-}t \text{ curve}$
 $v_6 - 0 = (6 \text{ s})(4 \text{ ft/s}^2) = 24 \text{ ft/s}$
- $6 < t < t_2$: Since the velocity increases from 24 to 48 ft/s,
Change in $v = \text{area under } a\text{-}t \text{ curve}$
 $48 \text{ ft/s} - 24 \text{ ft/s} = (t_2 - 6)(6 \text{ ft/s}^2) \quad t_2 = 10 \text{ s}$
- $t_2 < t < 34$: Since the velocity is constant, the acceleration is zero.
- $34 < t < 40$: Change in $v = \text{area under } a\text{-}t \text{ curve}$
 $0 - 48 \text{ ft/s} = (6 \text{ s})a_4 \quad a_4 = -8 \text{ ft/s}^2$

The acceleration being negative, the corresponding area is below the t axis; this area represents a decrease in velocity.



Velocity-Time Curve. Since the acceleration is either constant or zero, the v - t curve is made of straight-line segments connecting the points determined above.

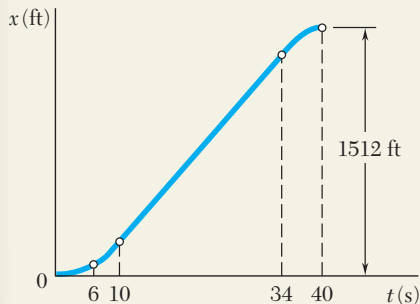
Change in $x = \text{area under } v\text{-}t \text{ curve}$

- $0 < t < 6$: $x_6 - 0 = \frac{1}{2}(6)(24) = 72 \text{ ft}$
- $6 < t < 10$: $x_{10} - x_6 = \frac{1}{2}(4)(24 + 48) = 144 \text{ ft}$
- $10 < t < 34$: $x_{34} - x_{10} = (24)(48) = 1152 \text{ ft}$
- $34 < t < 40$: $x_{40} - x_{34} = \frac{1}{2}(6)(48) = 144 \text{ ft}$

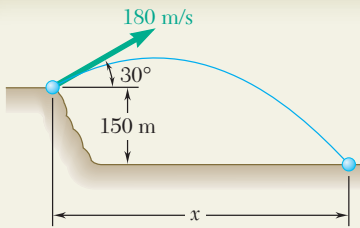
Adding the changes in x , we obtain the distance from A to B:

$$d = x_{40} - 0 = 1512 \text{ ft}$$

$$d = 1512 \text{ ft} \quad \blacktriangleleft$$



Position-Time Curve. The points determined above should be joined by three arcs of parabola and one straight-line segment. In constructing the x - t curve, keep in mind that for any value of t the slope of the tangent to the x - t curve is equal to the value of v at that instant.



SAMPLE PROBLEM 11.7

A projectile is fired from the edge of a 150-m cliff with an initial velocity of 180 m/s at an angle of 30° with the horizontal. Neglecting air resistance, find (a) the horizontal distance from the gun to the point where the projectile strikes the ground, (b) the greatest elevation above the ground reached by the projectile.

SOLUTION

The vertical and the horizontal motion will be considered separately.

Vertical Motion. Uniformly Accelerated Motion. Choosing the positive sense of the y axis upward and placing the origin O at the gun, we have

$$(v_y)_0 = (180 \text{ m/s}) \sin 30^\circ = +90 \text{ m/s}$$

$$a = -9.81 \text{ m/s}^2$$

Substituting into the equations of uniformly accelerated motion, we have

$$v_y = (v_y)_0 + at \quad v_y = 90 - 9.81t \quad (1)$$

$$y = (v_y)_0 t + \frac{1}{2}at^2 \quad y = 90t - 4.90t^2 \quad (2)$$

$$v_y^2 = (v_y)_0^2 + 2ay \quad v_y^2 = 8100 - 19.62y \quad (3)$$

Horizontal Motion. Uniform Motion. Choosing the positive sense of the x axis to the right, we have

$$(v_x)_0 = (180 \text{ m/s}) \cos 30^\circ = +155.9 \text{ m/s}$$

Substituting into the equation of uniform motion, we obtain

$$x = (v_x)_0 t \quad x = 155.9t \quad (4)$$

a. Horizontal Distance. When the projectile strikes the ground, we have

$$y = -150 \text{ m}$$

Carrying this value into Eq. (2) for the vertical motion, we write

$$-150 = 90t - 4.90t^2 \quad t^2 - 18.37t - 30.6 = 0 \quad t = 19.91 \text{ s}$$

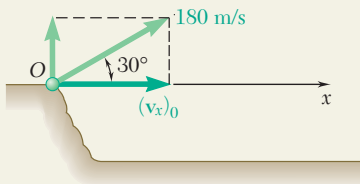
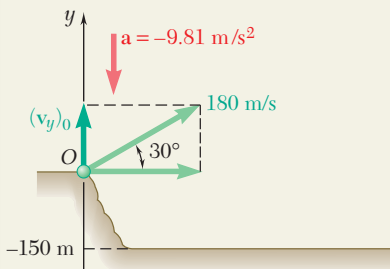
Carrying $t = 19.91 \text{ s}$ into Eq. (4) for the horizontal motion, we obtain

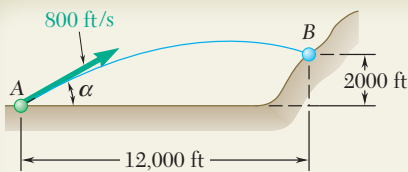
$$x = 155.9(19.91) \quad x = 3100 \text{ m} \quad \blacktriangleleft$$

b. Greatest Elevation. When the projectile reaches its greatest elevation, we have $v_y = 0$; carrying this value into Eq. (3) for the vertical motion, we write

$$0 = 8100 - 19.62y \quad y = 413 \text{ m}$$

$$\text{Greatest elevation above ground} = 150 \text{ m} + 413 \text{ m} = 563 \text{ m} \quad \blacktriangleleft$$



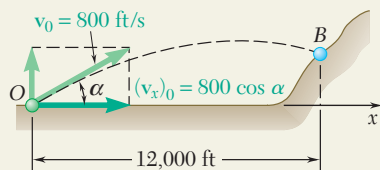


SAMPLE PROBLEM 11.8

A projectile is fired with an initial velocity of 800 ft/s at a target B located 2000 ft above the gun A and at a horizontal distance of 12,000 ft. Neglecting air resistance, determine the value of the firing angle α .

SOLUTION

The horizontal and the vertical motion will be considered separately.



Horizontal Motion. Placing the origin of the coordinate axes at the gun, we have

$$(v_x)_0 = 800 \cos \alpha$$

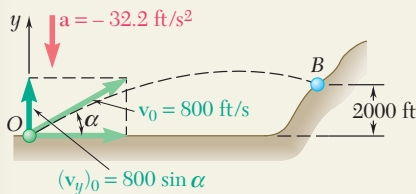
Substituting into the equation of uniform horizontal motion, we obtain

$$x = (v_x)_0 t \quad x = (800 \cos \alpha)t$$

The time required for the projectile to move through a horizontal distance of 12,000 ft is obtained by setting x equal to 12,000 ft.

$$12,000 = (800 \cos \alpha)t$$

$$t = \frac{12,000}{800 \cos \alpha} = \frac{15}{\cos \alpha}$$



Vertical Motion

$$(v_y)_0 = 800 \sin \alpha \quad a = -32.2 \text{ ft/s}^2$$

Substituting into the equation of uniformly accelerated vertical motion, we obtain

$$y = (v_y)_0 t + \frac{1}{2} a t^2 \quad y = (800 \sin \alpha)t - 16.1 t^2$$

Projectile Hits Target. When $x = 12,000$ ft, we must have $y = 2000$ ft. Substituting for y and setting t equal to the value found above, we write

$$2000 = 800 \sin \alpha \frac{15}{\cos \alpha} - 16.1 \left(\frac{15}{\cos \alpha} \right)^2$$

Since $1/\cos^2 \alpha = \sec^2 \alpha = 1 + \tan^2 \alpha$, we have

$$2000 = 800(15) \tan \alpha - 16.1(15^2)(1 + \tan^2 \alpha)$$

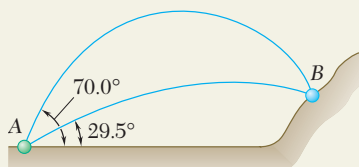
$$3622 \tan^2 \alpha - 12,000 \tan \alpha + 5622 = 0$$

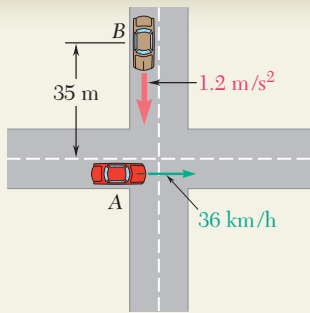
Solving this quadratic equation for $\tan \alpha$, we have

$$\tan \alpha = 0.565 \quad \text{and} \quad \tan \alpha = 2.75$$

$$\alpha = 29.5^\circ \quad \text{and} \quad \alpha = 70.0^\circ \quad \blacktriangleleft$$

The target will be hit if either of these two firing angles is used (see figure).



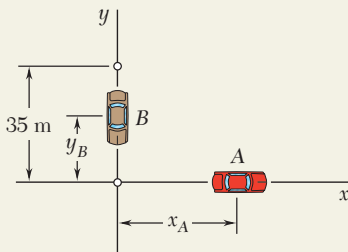


SAMPLE PROBLEM 11.9

Automobile A is traveling east at the constant speed of 36 km/h. As automobile A crosses the intersection shown, automobile B starts from rest 35 m north of the intersection and moves south with a constant acceleration of 1.2 m/s^2 . Determine the position, velocity, and acceleration of B relative to A 5 s after A crosses the intersection.

SOLUTION

We choose x and y axes with origin at the intersection of the two streets and with positive senses directed respectively east and north.



Motion of Automobile A. First the speed is expressed in m/s:

$$v_A = \left(36 \frac{\text{km}}{\text{h}}\right) \left(\frac{1000 \text{ m}}{1 \text{ km}}\right) \left(\frac{1 \text{ h}}{3600 \text{ s}}\right) = 10 \text{ m/s}$$

Noting that the motion of A is uniform, we write, for any time t ,

$$\begin{aligned} a_A &= 0 \\ v_A &= +10 \text{ m/s} \\ x_A &= (x_A)_0 + v_A t = 0 + 10t \end{aligned}$$

For $t = 5 \text{ s}$, we have

$$\begin{aligned} a_A &= 0 & \mathbf{a}_A &= 0 \\ v_A &= +10 \text{ m/s} & \mathbf{v}_A &= 10 \text{ m/s} \rightarrow \\ x_A &= +(10 \text{ m/s})(5 \text{ s}) = +50 \text{ m} & \mathbf{r}_A &= 50 \text{ m} \rightarrow \end{aligned}$$

Motion of Automobile B. We note that the motion of B is uniformly accelerated and write

$$\begin{aligned} a_B &= -1.2 \text{ m/s}^2 \\ v_B &= (v_B)_0 + at = 0 - 1.2t \\ y_B &= (y_B)_0 + (v_B)_0 t + \frac{1}{2} a_B t^2 = 35 + 0 - \frac{1}{2}(1.2)t^2 \end{aligned}$$

For $t = 5 \text{ s}$, we have

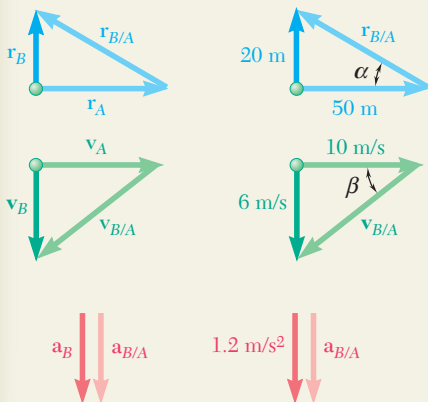
$$\begin{aligned} a_B &= -1.2 \text{ m/s}^2 & \mathbf{a}_B &= 1.2 \text{ m/s}^2 \downarrow \\ v_B &= -(1.2 \text{ m/s}^2)(5 \text{ s}) = -6 \text{ m/s} & \mathbf{v}_B &= 6 \text{ m/s} \downarrow \\ y_B &= 35 - \frac{1}{2}(1.2 \text{ m/s}^2)(5 \text{ s})^2 = +20 \text{ m} & \mathbf{r}_B &= 20 \text{ m} \uparrow \end{aligned}$$

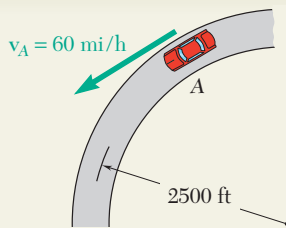
Motion of B Relative to A. We draw the triangle corresponding to the vector equation $\mathbf{r}_B = \mathbf{r}_A + \mathbf{r}_{B/A}$ and obtain the magnitude and direction of the position vector of B relative to A.

$$r_{B/A} = 53.9 \text{ m} \quad \alpha = 21.8^\circ \quad \mathbf{r}_{B/A} = 53.9 \text{ m} \searrow 21.8^\circ$$

Proceeding in a similar fashion, we find the velocity and acceleration of B relative to A.

$$\begin{aligned} v_{B/A} &= 11.66 \text{ m/s} & \mathbf{v}_B &= \mathbf{v}_A + \mathbf{v}_{B/A} & \beta &= 31.0^\circ & \mathbf{v}_{B/A} &= 11.66 \text{ m/s} \nearrow 31.0^\circ \\ \mathbf{a}_B &= \mathbf{a}_A + \mathbf{a}_{B/A} & \mathbf{a}_{B/A} &= 1.2 \text{ m/s}^2 \downarrow \end{aligned}$$





SAMPLE PROBLEM 11.10

A motorist is traveling on a curved section of highway of radius 2500 ft at the speed of 60 mi/h. The motorist suddenly applies the brakes, causing the automobile to slow down at a constant rate. Knowing that after 8 s the speed has been reduced to 45 mi/h, determine the acceleration of the automobile immediately after the brakes have been applied.

SOLUTION

Tangential Component of Acceleration. First the speeds are expressed in ft/s.

$$60 \text{ mi/h} = \left(60 \frac{\text{mi}}{\text{h}}\right) \left(\frac{5280 \text{ ft}}{1 \text{ mi}}\right) \left(\frac{1 \text{ h}}{3600 \text{ s}}\right) = 88 \text{ ft/s}$$

$$45 \text{ mi/h} = 66 \text{ ft/s}$$

Since the automobile slows down at a constant rate, we have

$$a_t = \text{average } a_t = \frac{\Delta v}{\Delta t} = \frac{66 \text{ ft/s} - 88 \text{ ft/s}}{8 \text{ s}} = -2.75 \text{ ft/s}^2$$

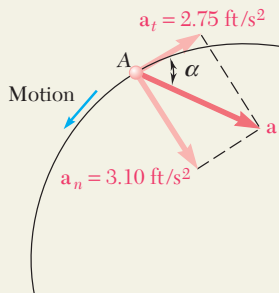
Normal Component of Acceleration. Immediately after the brakes have been applied, the speed is still 88 ft/s, and we have

$$a_n = \frac{v^2}{\rho} = \frac{(88 \text{ ft/s})^2}{2500 \text{ ft}} = 3.10 \text{ ft/s}^2$$

Magnitude and Direction of Acceleration. The magnitude and direction of the resultant \mathbf{a} of the components \mathbf{a}_n and \mathbf{a}_t are

$$\tan \alpha = \frac{a_n}{a_t} = \frac{3.10 \text{ ft/s}^2}{2.75 \text{ ft/s}^2} \quad \alpha = 48.4^\circ \quad \blacktriangleleft$$

$$a = \frac{a_n}{\sin \alpha} = \frac{3.10 \text{ ft/s}^2}{\sin 48.4^\circ} \quad \mathbf{a} = 4.14 \text{ ft/s}^2 \quad \blacktriangleleft$$



SAMPLE PROBLEM 11.11

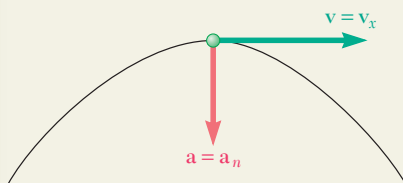
Determine the minimum radius of curvature of the trajectory described by the projectile considered in Sample Prob. 11.7.

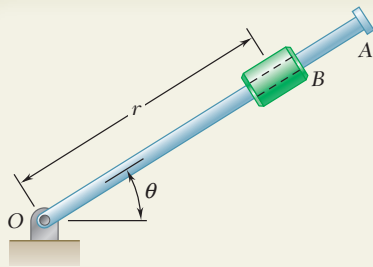
SOLUTION

Since $a_n = v^2/\rho$, we have $\rho = v^2/a_n$. The radius will be small when v is small or when a_n is large. The speed v is minimum at the top of the trajectory since $v_y = 0$ at that point; a_n is maximum at that same point, since the direction of the vertical coincides with the direction of the normal. Therefore, the minimum radius of curvature occurs at the top of the trajectory. At this point, we have

$$v = v_x = 155.9 \text{ m/s} \quad a_n = a = 9.81 \text{ m/s}^2$$

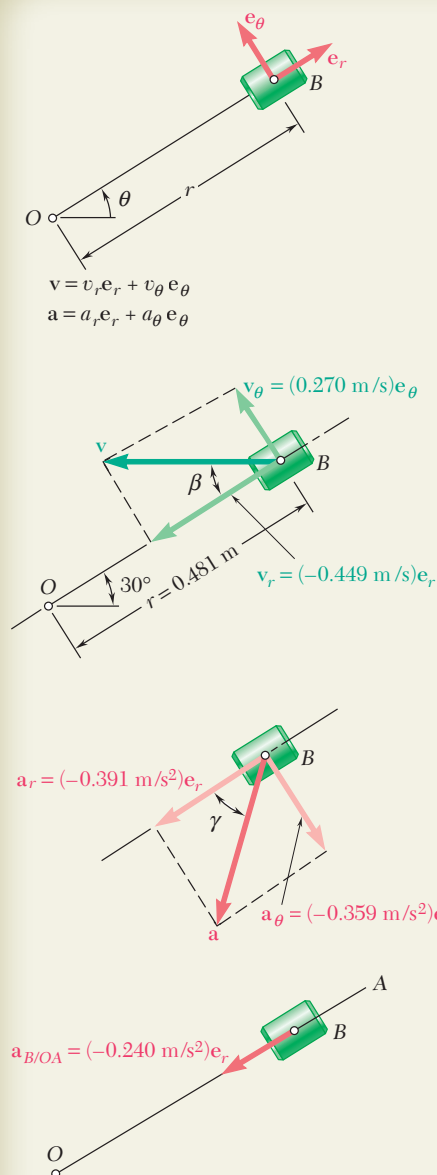
$$\rho = \frac{v^2}{a_n} = \frac{(155.9 \text{ m/s})^2}{9.81 \text{ m/s}^2} \quad \rho = 2480 \text{ m} \quad \blacktriangleleft$$





SAMPLE PROBLEM 11.12

The rotation of the 0.9-m arm OA about O is defined by the relation $\theta = 0.15t^2$, where θ is expressed in radians and t in seconds. Collar B slides along the arm in such a way that its distance from O is $r = 0.9 - 0.12t^2$, where r is expressed in meters and t in seconds. After the arm OA has rotated through 30° , determine (a) the total velocity of the collar, (b) the total acceleration of the collar, (c) the relative acceleration of the collar with respect to the arm.



SOLUTION

Time t at which $\theta = 30^\circ$. Substituting $\theta = 30^\circ = 0.524$ rad into the expression for θ , we obtain

$$\theta = 0.15t^2 \quad 0.524 = 0.15t^2 \quad t = 1.869 \text{ s}$$

Equations of Motion. Substituting $t = 1.869$ s in the expressions for r , θ , and their first and second derivatives, we have

$$\begin{aligned} r &= 0.9 - 0.12t^2 = 0.481 \text{ m} & \theta &= 0.15t^2 = 0.524 \text{ rad} \\ \dot{r} &= -0.24t = -0.449 \text{ m/s} & \dot{\theta} &= 0.30t = 0.561 \text{ rad/s} \\ \ddot{r} &= -0.24 = -0.240 \text{ m/s}^2 & \ddot{\theta} &= 0.30 = 0.300 \text{ rad/s}^2 \end{aligned}$$

a. Velocity of B . Using Eqs. (11.45), we obtain the values of v_r and v_θ when $t = 1.869$ s.

$$\begin{aligned} v_r &= \dot{r} = -0.449 \text{ m/s} \\ v_\theta &= r\dot{\theta} = 0.481(0.561) = 0.270 \text{ m/s} \end{aligned}$$

Solving the right triangle shown, we obtain the magnitude and direction of the velocity,

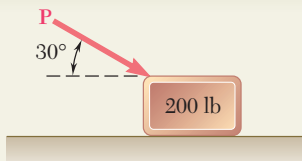
$$v = 0.524 \text{ m/s} \quad \beta = 31.0^\circ \quad \blacktriangleleft$$

b. Acceleration of B . Using Eqs. (11.46), we obtain

$$\begin{aligned} a_r &= \ddot{r} - r\dot{\theta}^2 \\ &= -0.240 - 0.481(0.561)^2 = -0.391 \text{ m/s}^2 \\ a_\theta &= r\ddot{\theta} + 2\dot{r}\dot{\theta} \\ &= 0.481(0.300) + 2(-0.449)(0.561) = -0.359 \text{ m/s}^2 \\ a &= 0.531 \text{ m/s}^2 \quad \gamma = 42.6^\circ \quad \blacktriangleleft \end{aligned}$$

c. Acceleration of B with Respect to Arm OA . We note that the motion of the collar with respect to the arm is rectilinear and defined by the coordinate r . We write

$$\begin{aligned} a_{B/OA} &= \ddot{r} = -0.240 \text{ m/s}^2 \\ a_{B/OA} &= 0.240 \text{ m/s}^2 \text{ toward } O. \quad \blacktriangleleft \end{aligned}$$



SAMPLE PROBLEM 12.1

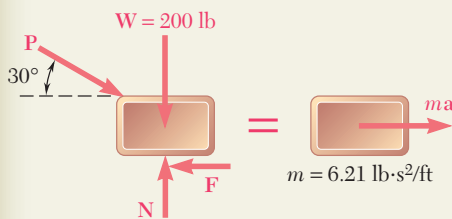
A 200-lb block rests on a horizontal plane. Find the magnitude of the force \mathbf{P} required to give the block an acceleration of 10 ft/s^2 to the right. The coefficient of kinetic friction between the block and the plane is $\mu_k = 0.25$.

SOLUTION

The mass of the block is

$$m = \frac{W}{g} = \frac{200 \text{ lb}}{32.2 \text{ ft/s}^2} = 6.21 \text{ lb} \cdot \text{s}^2/\text{ft}$$

We note that $F = \mu_k N = 0.25N$ and that $a = 10 \text{ ft/s}^2$. Expressing that the forces acting on the block are equivalent to the vector $m\mathbf{a}$, we write

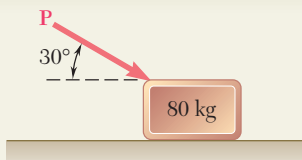


$$\begin{aligned} \rightarrow \Sigma F_x = ma: \quad & P \cos 30^\circ - 0.25N = (6.21 \text{ lb} \cdot \text{s}^2/\text{ft})(10 \text{ ft/s}^2) \\ & P \cos 30^\circ - 0.25N = 62.1 \text{ lb} \end{aligned} \quad (1)$$

$$+\uparrow \Sigma F_y = 0: \quad N - P \sin 30^\circ - 200 \text{ lb} = 0 \quad (2)$$

Solving (2) for N and substituting the result into (1), we obtain

$$\begin{aligned} N &= P \sin 30^\circ + 200 \text{ lb} \\ P \cos 30^\circ - 0.25(P \sin 30^\circ + 200 \text{ lb}) &= 62.1 \text{ lb} \quad P = 151 \text{ lb} \quad \blacktriangleleft \end{aligned}$$



SAMPLE PROBLEM 12.2

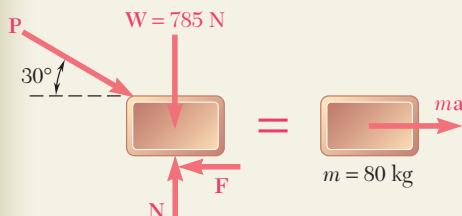
An 80-kg block rests on a horizontal plane. Find the magnitude of the force \mathbf{P} required to give the block an acceleration of 2.5 m/s^2 to the right. The coefficient of kinetic friction between the block and the plane is $\mu_k = 0.25$.

SOLUTION

The weight of the block is

$$W = mg = (80 \text{ kg})(9.81 \text{ m/s}^2) = 785 \text{ N}$$

We note that $F = \mu_k N = 0.25N$ and that $a = 2.5 \text{ m/s}^2$. Expressing that the forces acting on the block are equivalent to the vector $m\mathbf{a}$, we write

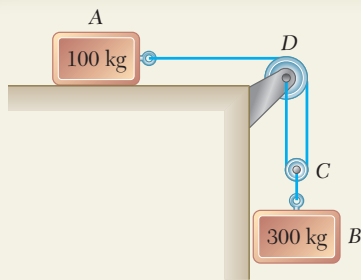


$$\begin{aligned} \rightarrow \Sigma F_x = ma: \quad & P \cos 30^\circ - 0.25N = (80 \text{ kg})(2.5 \text{ m/s}^2) \\ & P \cos 30^\circ - 0.25N = 200 \text{ N} \end{aligned} \quad (1)$$

$$+\uparrow \Sigma F_y = 0: \quad N - P \sin 30^\circ - 785 \text{ N} = 0 \quad (2)$$

Solving (2) for N and substituting the result into (1), we obtain

$$\begin{aligned} N &= P \sin 30^\circ + 785 \text{ N} \\ P \cos 30^\circ - 0.25(P \sin 30^\circ + 785 \text{ N}) &= 200 \text{ N} \quad P = 535 \text{ N} \quad \blacktriangleleft \end{aligned}$$



SAMPLE PROBLEM 12.3

The two blocks shown start from rest. The horizontal plane and the pulley are frictionless, and the pulley is assumed to be of negligible mass. Determine the acceleration of each block and the tension in each cord.

SOLUTION

Kinematics. We note that if block A moves through x_A to the right, block B moves down through

$$x_B = \frac{1}{2}x_A$$

Differentiating twice with respect to t , we have

$$a_B = \frac{1}{2}a_A \quad (1)$$

Kinetics. We apply Newton's second law successively to block A, block B, and pulley C.

Block A. Denoting by T_1 the tension in cord ACD, we write

$$\rightarrow \Sigma F_x = m_A a_A: \quad T_1 = 100a_A \quad (2)$$

Block B. Observing that the weight of block B is

$$W_B = m_B g = (300 \text{ kg})(9.81 \text{ m/s}^2) = 2940 \text{ N}$$

and denoting by T_2 the tension in cord BC, we write

$$+\downarrow \Sigma F_y = m_B a_B: \quad 2940 - T_2 = 300a_B$$

or, substituting for a_B from (1),

$$\begin{aligned} 2940 - T_2 &= 300\left(\frac{1}{2}a_A\right) \\ T_2 &= 2940 - 150a_A \end{aligned} \quad (3)$$

Pulley C. Since m_C is assumed to be zero, we have

$$+\downarrow \Sigma F_y = m_C a_C = 0: \quad T_2 - 2T_1 = 0 \quad (4)$$

Substituting for T_1 and T_2 from (2) and (3), respectively, into (4) we write

$$\begin{aligned} 2940 - 150a_A - 2(100a_A) &= 0 \\ 2940 - 350a_A &= 0 \quad a_A = 8.40 \text{ m/s}^2 \end{aligned} \quad \blacktriangleleft$$

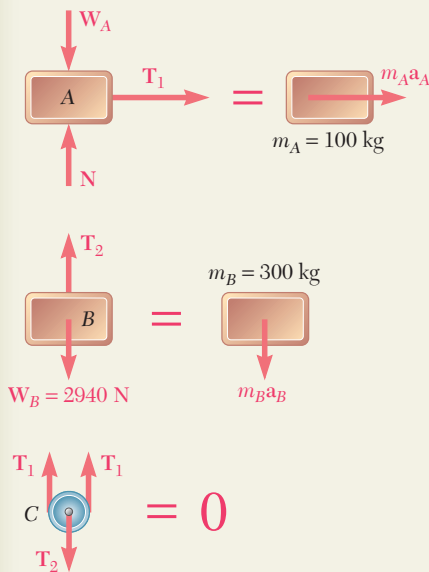
Substituting the value obtained for a_A into (1) and (2), we have

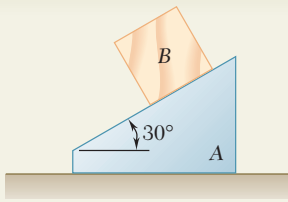
$$\begin{aligned} a_B &= \frac{1}{2}a_A = \frac{1}{2}(8.40 \text{ m/s}^2) & a_B &= 4.20 \text{ m/s}^2 \quad \blacktriangleleft \\ T_1 &= 100a_A = (100 \text{ kg})(8.40 \text{ m/s}^2) & T_1 &= 840 \text{ N} \quad \blacktriangleleft \end{aligned}$$

Recalling (4), we write

$$T_2 = 2T_1 \quad T_2 = 2(840 \text{ N}) \quad T_2 = 1680 \text{ N} \quad \blacktriangleleft$$

We note that the value obtained for T_2 is *not* equal to the weight of block B.



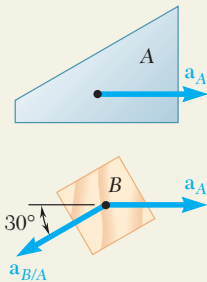


SAMPLE PROBLEM 12.4

The 12-lb block B starts from rest and slides on the 30-lb wedge A , which is supported by a horizontal surface. Neglecting friction, determine (a) the acceleration of the wedge, (b) the acceleration of the block relative to the wedge.

SOLUTION

Kinematics. We first examine the acceleration of the wedge and the acceleration of the block.



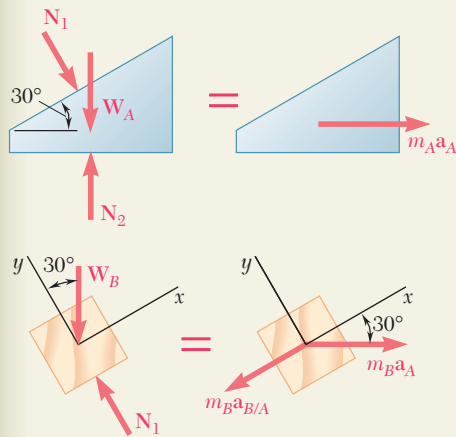
Wedge A. Since the wedge is constrained to move on the horizontal surface, its acceleration \mathbf{a}_A is horizontal. We will assume that it is directed to the right.

Block B. The acceleration \mathbf{a}_B of block B can be expressed as the sum of the acceleration of A and the acceleration of B relative to A . We have

$$\mathbf{a}_B = \mathbf{a}_A + \mathbf{a}_{B/A}$$

where $\mathbf{a}_{B/A}$ is directed along the inclined surface of the wedge.

Kinetics. We draw the free-body diagrams of the wedge and of the block and apply Newton's second law.



Wedge A. We denote the forces exerted by the block and the horizontal surface on wedge A by N_1 and N_2 , respectively.

$$\begin{aligned} \rightarrow \Sigma F_x = m_A a_A: \quad N_1 \sin 30^\circ &= m_A a_A \\ 0.5N_1 &= (W_A/g)a_A \end{aligned} \quad (1)$$

Block B. Using the coordinate axes shown and resolving \mathbf{a}_B into its components \mathbf{a}_A and $\mathbf{a}_{B/A}$, we write

$$\begin{aligned} + \nearrow \Sigma F_x = m_B a_x: \quad -W_B \sin 30^\circ &= m_B a_A \cos 30^\circ - m_B a_{B/A} \\ -W_B \sin 30^\circ &= (W_B/g)(a_A \cos 30^\circ - a_{B/A}) \\ a_{B/A} &= a_A \cos 30^\circ + g \sin 30^\circ \end{aligned} \quad (2)$$

$$\begin{aligned} + \searrow \Sigma F_y = m_B a_y: \quad N_1 - W_B \cos 30^\circ &= -m_B a_A \sin 30^\circ \\ N_1 - W_B \cos 30^\circ &= -(W_B/g)a_A \sin 30^\circ \end{aligned} \quad (3)$$

a. Acceleration of Wedge A. Substituting for N_1 from Eq. (1) into Eq. (3), we have

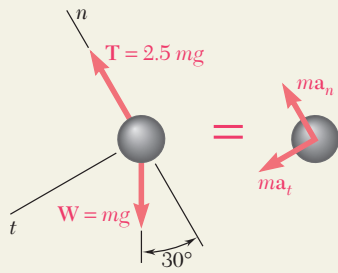
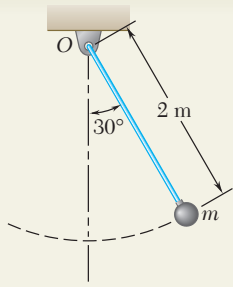
$$2(W_A/g)a_A - W_B \cos 30^\circ = -(W_B/g)a_A \sin 30^\circ$$

Solving for a_A and substituting the numerical data, we write

$$\begin{aligned} a_A &= \frac{W_B \cos 30^\circ}{2W_A + W_B \sin 30^\circ} g = \frac{(12 \text{ lb}) \cos 30^\circ}{2(30 \text{ lb}) + (12 \text{ lb}) \sin 30^\circ} (32.2 \text{ ft/s}^2) \\ a_A &= +5.07 \text{ ft/s}^2 \quad \mathbf{a}_A = 5.07 \text{ ft/s}^2 \rightarrow \blacktriangleleft \end{aligned}$$

b. Acceleration of Block B Relative to A. Substituting the value obtained for a_A into Eq. (2), we have

$$\begin{aligned} a_{B/A} &= (5.07 \text{ ft/s}^2) \cos 30^\circ + (32.2 \text{ ft/s}^2) \sin 30^\circ \\ a_{B/A} &= +20.5 \text{ ft/s}^2 \quad \mathbf{a}_{B/A} = 20.5 \text{ ft/s}^2 \nearrow 30^\circ \blacktriangleleft \end{aligned}$$



SAMPLE PROBLEM 12.5

The bob of a 2-m pendulum describes an arc of circle in a vertical plane. If the tension in the cord is 2.5 times the weight of the bob for the position shown, find the velocity and the acceleration of the bob in that position.

SOLUTION

The weight of the bob is $W = mg$; the tension in the cord is thus $2.5 mg$. Recalling that \mathbf{a}_n is directed toward O and assuming \mathbf{a}_t as shown, we apply Newton's second law and obtain

$$+\swarrow \Sigma F_t = ma_t: \quad mg \sin 30^\circ = ma_t$$

$$a_t = g \sin 30^\circ = +4.90 \text{ m/s}^2 \quad \mathbf{a}_t = 4.90 \text{ m/s}^2 \swarrow$$

$$+\nwarrow \Sigma F_n = ma_n: \quad 2.5 mg - mg \cos 30^\circ = ma_n$$

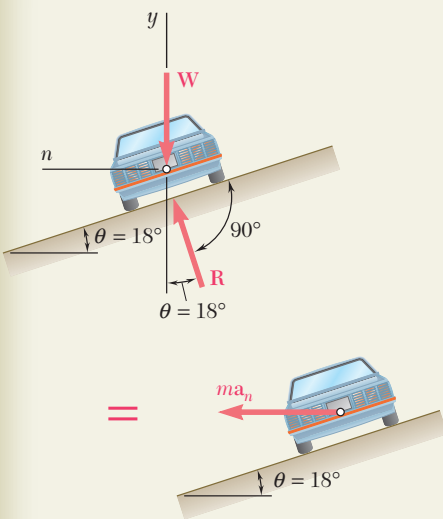
$$a_n = 1.634 g = +16.03 \text{ m/s}^2 \quad \mathbf{a}_n = 16.03 \text{ m/s}^2 \nwarrow$$

Since $a_n = v^2/\rho$, we have $v^2 = \rho a_n = (2 \text{ m})(16.03 \text{ m/s}^2)$

$$v = \pm 5.66 \text{ m/s} \quad \mathbf{v} = 5.66 \text{ m/s} \swarrow (\text{up or down})$$

SAMPLE PROBLEM 12.6

Determine the rated speed of a highway curve of radius $\rho = 400 \text{ ft}$ banked through an angle $\theta = 18^\circ$. The *rated speed* of a banked highway curve is the speed at which a car should travel if no lateral friction force is to be exerted on its wheels.



SOLUTION

The car travels in a *horizontal* circular path of radius ρ . The normal component \mathbf{a}_n of the acceleration is directed toward the center of the path; its magnitude is $a_n = v^2/\rho$, where v is the speed of the car in ft/s. The mass m of the car is W/g , where W is the weight of the car. Since no lateral friction force is to be exerted on the car, the reaction \mathbf{R} of the road is shown perpendicular to the roadway. Applying Newton's second law, we write

$$+\uparrow \Sigma F_y = 0: \quad R \cos \theta - W = 0 \quad R = \frac{W}{\cos \theta} \quad (1)$$

$$\leftarrow \Sigma F_n = ma_n: \quad R \sin \theta = \frac{W}{g} a_n \quad (2)$$

Substituting for R from (1) into (2), and recalling that $a_n = v^2/\rho$,

$$\frac{W}{\cos \theta} \sin \theta = \frac{W}{g} \frac{v^2}{\rho} \quad v^2 = g \rho \tan \theta$$

Substituting $\rho = 400 \text{ ft}$ and $\theta = 18^\circ$ into this equation, we obtain

$$v^2 = (32.2 \text{ ft/s}^2)(400 \text{ ft}) \tan 18^\circ$$

$$v = 64.7 \text{ ft/s} \quad \mathbf{v} = 44.1 \text{ mi/h}$$